

B1: Get out your books and start talking about what the explicit equation would be for our pattern in 1.1, pg. 3.

We will finish that up and go over any HW questions you have after Ms. Hansen takes attendance.

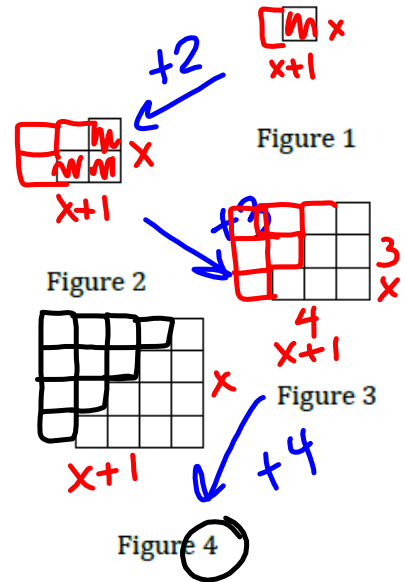
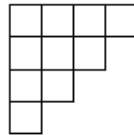
3. Examine the sequence of figures and find a rule or formula for the number of tiles in any figure number.

$$f(1) = 1$$

$$f(x) = f(x-1) +$$

Recursive For

Figure 4



of blocks in any figure = previous figure + X
 this figure #

Explicit

$$f(x) = \frac{x(x+1)}{2} = \frac{x^2 + x}{2} = \frac{1}{2}x^2 + \frac{1}{2}x$$

sec2_mod1_quadfun_se_813113 (16).pdf - Adobe Acrobat Reader DC

File Edit View Window Help

Home Tools sec2_mod1_quadfu... x

125%

In each set of 3 functions, one will be linear and one will be exponential. One of the three will be a new category of function. List the characteristics in each table that helped you to identify the linear and the exponential functions. What are some characteristics of the new function? Find an explicit and recursive equation for each.

8. Linear, exponential, or a new kind of function.

a.

x	f(x)
6	64
7	128
8	256
9	512
10	1024

a^x

Type and characteristics? exponential

Explicit equation: $f(x) = 2^x$

Recursive equation: previous $\cdot 2$

b.

x	f(x)
6	36
7	49
8	64
9	81
10	100

Type and characteristics? new (quadratic)

Explicit equation: $f(x) = x^2$

Recursive equation: previous \cdot itself

c.

x	f(x)
6	11
7	13
8	15
9	17
10	19

Type and characteristics? linear

Explicit equation: $f(x) = 2x - 1$

Recursive equation: previous + 2

$13 = 2 \cdot 7 + b$

© 2013 MATHEMATICS VISION PROJECT | MVP

In partnership with the Utah State Office of Education

Licensed under the Creative Commons Attribution-NonCommercial-ShareAlike 3.0 Unported license

sec2_mod1_quadfun_se_813113 (16).pdf - Adobe Acrobat Reader DC

File Edit View Window Help

Home Tools sec2_mod1_quadfu... x

6 / 39 125%

25	65
26	68
27	71
28	74

14. $f(0) = 7; f(n+1) = f(n) + 5$

$(0, 7)$
 $(1, 12)$
 $(2, 17)$

15.

16. Slope of \overline{AB}
 $A(-3, 12) B(-11, -16)$
 $x_1, y_1 \quad x_2, y_2$

$$m = \frac{y_2 - y_1}{x_2 - x_1}$$

17. George is loading freight into an elevator. He notices that the weight limit for the elevator is 1000 lbs. He knows that he weighs 210 lbs. He has loaded 15 boxes into the elevator. Each box weighs 50 lbs. Identify the rate of change for this situation.

$$m = \frac{-16 - 12}{-11 - -3}$$

19) $(-4, 24)$
 $(6, -36)$
 $x_2 \quad y_2$

B5: Get out your books and start talking about what the explicit equation would be for our pattern in 1.1, pg. 3.

We will finish that up and go over any HW questions you have after Ms. Hansen takes attendance.

3. Examine the sequence of figures and find a rule or formula for the number of tiles in any figure number.

recursive formula : $f(1) = 1$
 $f(x) = f(x-1) + x$



Figure 1



Figure 2

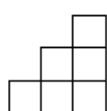


Figure 3

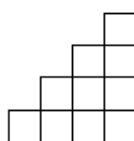


Figure 4

$$f(3) = f(3-1) + 3$$

$$f(3) = f(2) + 3$$

$$f(3) = 3 + 3$$

$$f(3) = 6$$

$$(3, 6)$$

1.2 I Rule!

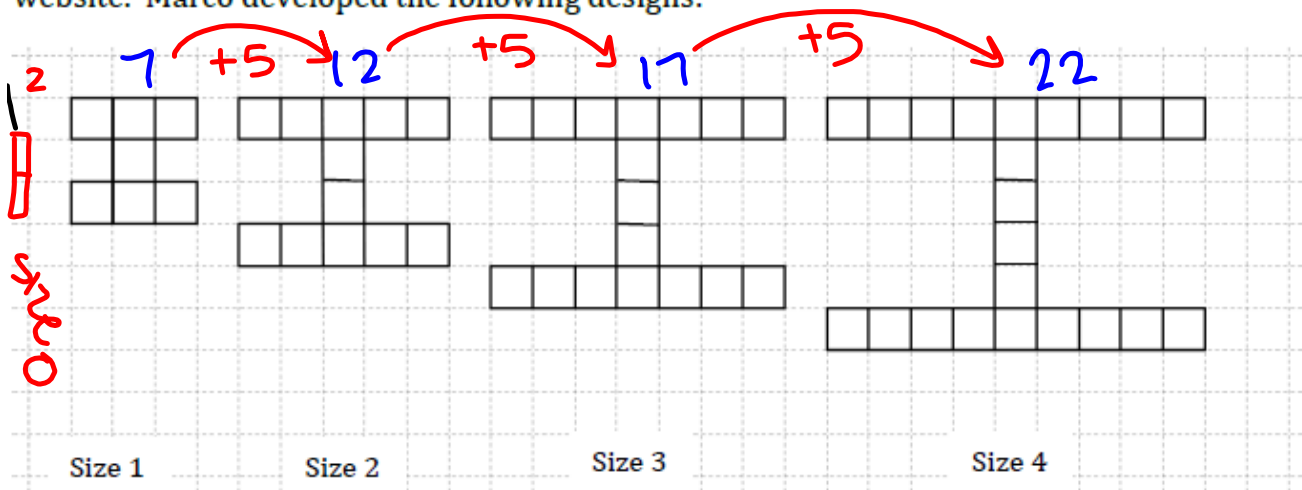
A Solidify Understanding Task



Marco has started a new blog about sports at Imagination High School (mascot: the fighting unicorns) that he has decided to call "I Site". He created a logo for the web site that looks like this:



He is working on creating the logo in various sizes to be placed on different pages on the website. Marco developed the following designs:



1. How many squares will be needed to create the size 100 logo?

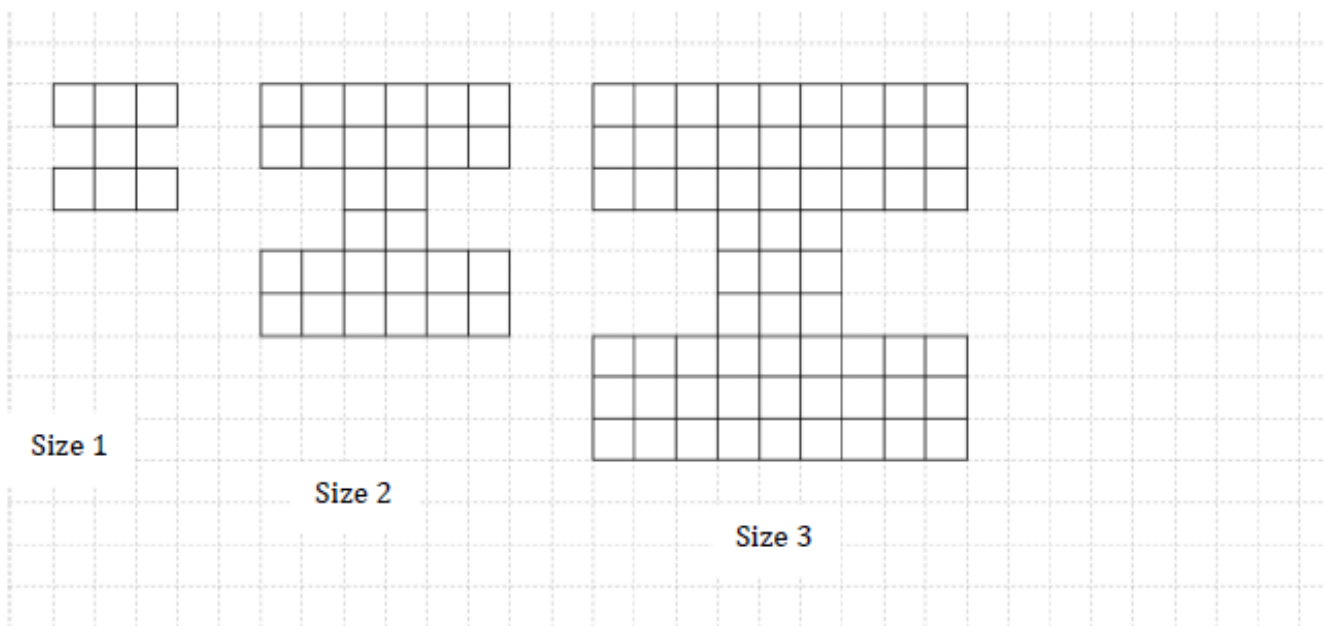
$$5 \cdot 100 + 2 = 502 \text{ blocks}$$

2. Develop a mathematical model for the number of squares in the logo for size n .


$$y = mx + b$$

$$y = 5x + 2$$

Marco decides to experiment with making his logo "blockier" so that it looks stronger. Here's what he came up with:



3. Assuming that Marco continues with the pattern as it has begun, draw the next figure, size 4, and find the number of blocks in the figure.



4. Develop a mathematical model for the number of blocks in a logo of size n .

5. Compare the models that you developed for the first set of logos to the second set of logos. In what ways are they similar? In what ways are they different?

Homework/Classwork

Finish 1.2