

Questions on 8.1 HW?

The screenshot shows a window titled "SM3H - Module 8 SE.pdf - Adobe Acrobat Reader DC". The interface includes a menu bar (File, Edit, View, Window, Help), a toolbar with icons for Home, Tools, and various functions, and a page indicator showing "8 / 44". The main content area displays a problem:

5. Remember that in statistics, μ is the symbol for mean and σ is the symbol for standard deviation. Using technology, identify the mean and standard deviation for the data set below:

$\{1.23, 1.3, 1.1, 1.48, 1, 1.14, 5.21, 5.1, 4.63\}$

$\mu = 2.5 \quad \sigma = 1.8$

using calc

Below the problem, the text "Mathematics Vision Project | MVP" and "Licensed under the Creative Commons Attribution-NonCommercial-ShareAlike 3.0 Unported license" is visible. At the bottom of the page, it says "Secondary Mathematics III". A footer section contains "Name" on the left and "Statistics | 8.1" on the right. The page number "9" is shown in the bottom corners. The window's status bar at the bottom indicates a page size of "8.50 x 11.00 in".

SM3H - Module 8 SE.pdf - Adobe Acrobat Reader DC

File Edit View Window Help

Home Tools SM3H - Module 8 ... x

9 / 44 125%

Name Statistics | 8.1


6. For the data in number 5, what time would fall one standard deviation above the mean?
Three standard deviations below the mean?

$2.5 + 1.8 = \underline{\hspace{2cm}}$

$2.5 - 3(1.8) = \underline{\hspace{2cm}}$

Set
Topic: Properties of Normal Curves

7. For each distribution, identify the properties that match with a Normal Distribution, and then decide if the distribution is Normal or not.

A.		Normal Properties:
----	---	--------------------

8.50 x 11.00 in

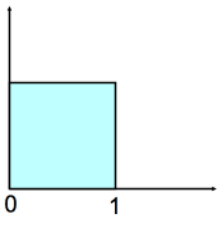
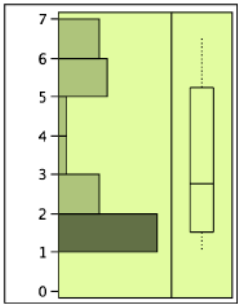
SM3H - Module 8 SE.pdf - Adobe Acrobat Reader DC

File Edit View Window Help

Home Tools SM3H - Module 8 ... x

9 / 44 125%

7. For each distribution, identify the properties that match with a Normal Distribution, and then decide if the distribution is Normal or not.

<p>A.</p> 	<p>Normal Properties: <i>Only symmetric; it has no other properties.</i></p> <p>Normal? Yes or <u>No</u></p>
<p>B.</p> 	<p>Normal Properties:</p> <p>Normal? Yes or No</p>

8.50 x 11.00 in

SM3H - Module 8 SE.pdf - Adobe Acrobat Reader DC

File Edit View Window Help

Home Tools SM3H - Module 8 ... x

12 / 44 200%

13. $h(y) = 3 + \sqrt{2y - 1}$

14.

7	0
---	---

$x = 3 + \sqrt{2y - 1}$

$(x - 3)^2 = (\sqrt{2y - 1})^2$

$(x - 3)^2 = 2y - 1$

$\frac{(x - 3)^2 + 1}{2} = \frac{2y}{2}$

$y = h^{-1}(x) = \frac{(x - 3)^2 + 1}{2} = \frac{1}{2}[(x - 3)^2 + 1]$

Determine if the following functions are inverses by finding

15. $f(x) = 2x + 3$ and $g(x) = \frac{1}{2}x - \frac{3}{2}$

16. $f(x) :$

8.50 x 11.00 in

SM3H - Module 8 SE.pdf - Adobe Acrobat Reader DC
File Edit View Window Help
Home Tools SM3H - Module 8 ... x
12 / 44 200%

15. $f(x) = 2x + 3$ and $g(x) = \frac{1}{2}x - \frac{3}{2}$
 $f(g(x)) = 2\left(\frac{1}{2}x - \frac{3}{2}\right) + 3$

16. $f(x)$
 $g(f(x)) = \frac{1}{2}(2x + 3) - \frac{3}{2}$

* If $f(g(x)) = x$ and
 $g(f(x)) = x$, then $f(x)$
and $g(x)$ are inverses!

Mathematics


8.50 x 11.00 in

Illuminate Block 3 Benchmark

-for participation points-

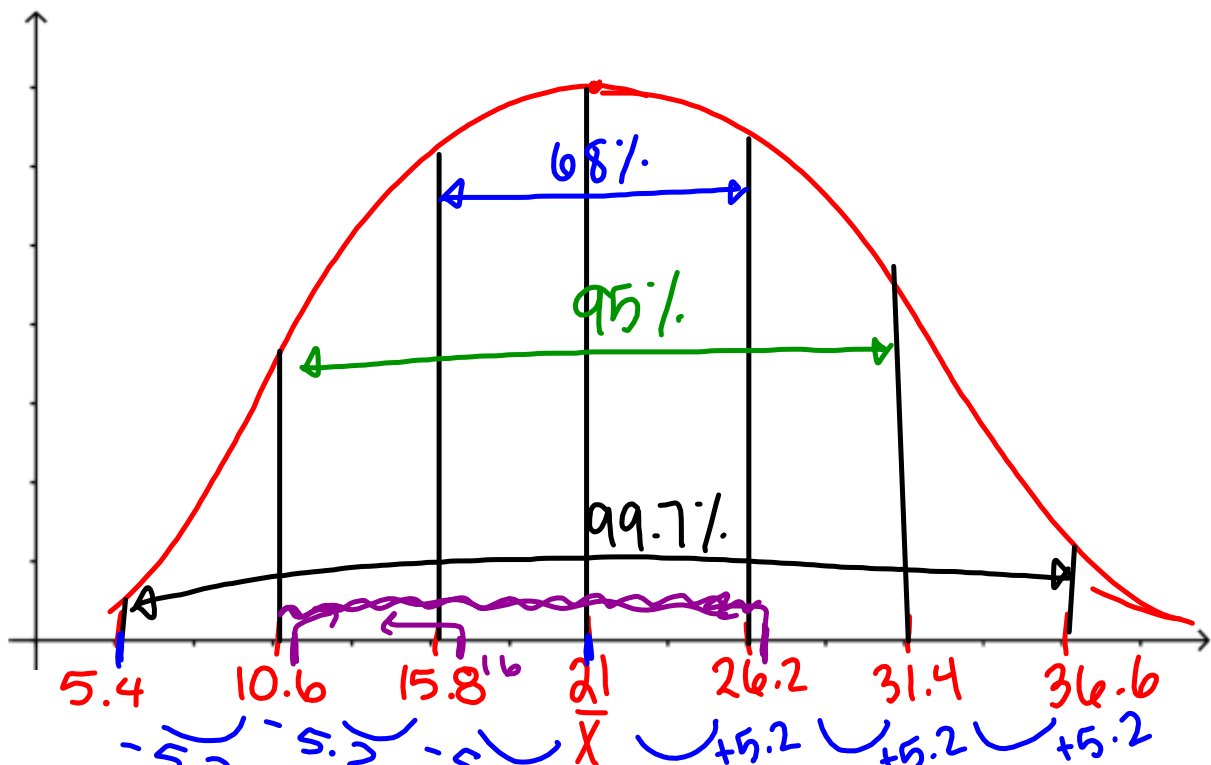
8.2 Just ACT Normal

A Solidify Understanding Task



1. One of the most common examples of a normal distribution is the distribution of scores on standardized tests like the ACT. In 2010, the mean score was 21 and the standard deviation was 5.2.

(Source: National Center for Education Statistics). Use this information to sketch a normal distribution curve for this test.



2. Use technology to check your graph. Did you get the points of inflection in the right places? (Make adjustments, if necessary.)

3. In "What Is Normal", you learned that the 68 - 95 - 99.7 rule. Use the rule to answer the following questions:

a. What percentage of students scored below 21?

50%

b. About what percentage of students scored below 16?

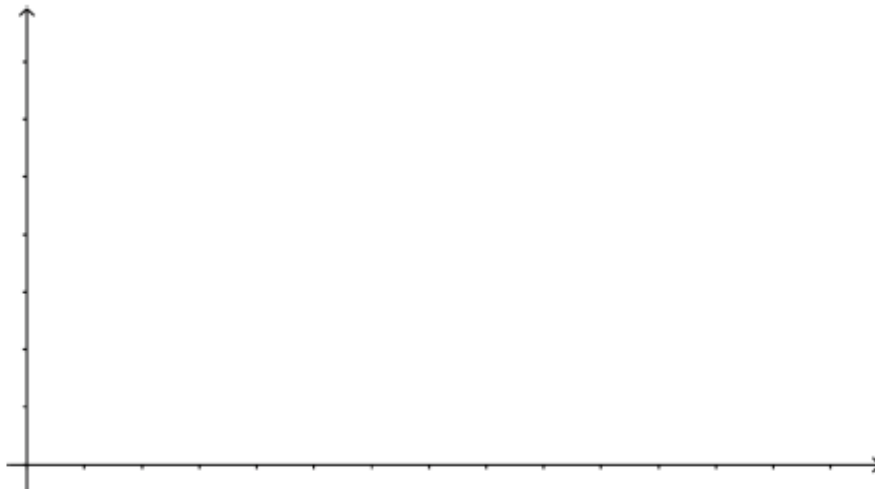
$$\frac{1}{2}(99.7) - \frac{1}{2}(68) = 15.8\%$$

c. About what percentage of students scored between 11 and 26?

$$\frac{1}{2}(95) + \frac{1}{2}(68) = 47.5 + 34 = 81.5\%$$

3. Your friend, Calvin, would like to go to a very selective college that only admits the top 1% of all student applicants. Calvin has good grades and scored 33 on the test. Do you think that Calvin's ACT score gives him a good chance of being admitted? Explain your answer.

4. Many students like to eat microwave popcorn as they study for the ACT. Microwave popcorn producers assume that the time it takes for a kernel to pop is distributed normally with a mean of 120 seconds and a standard deviation of 13 for a standard microwave oven. If you're a devoted popcorn studier, you don't want a lot of un-popped kernels, but you know that if you leave the bag in long enough to be sure that all the kernels are popped, some of the popcorn will burn. How much time would you recommend for microwaving the popcorn? Use a normal distribution curve and the features of a normal distribution to explain your answer.



Homework

Finish 8.2 "Ready, Set,
Go"