

## NO QUIZ TODAY - BEGIN WORKING ON

## THESE PROBLEMS WHEN THE BELL RINGS.

Determine the measure of an interior angle of the given regular polygon.

1. regular nonagon (9)

$$\frac{180(9-2)}{9} = \frac{180(7)}{9} = \frac{1260}{9} = \boxed{140^\circ}$$

2. regular decagon

$$\frac{180(10-2)}{10} = \boxed{144^\circ} \quad (10)$$

3. regular 15-gon

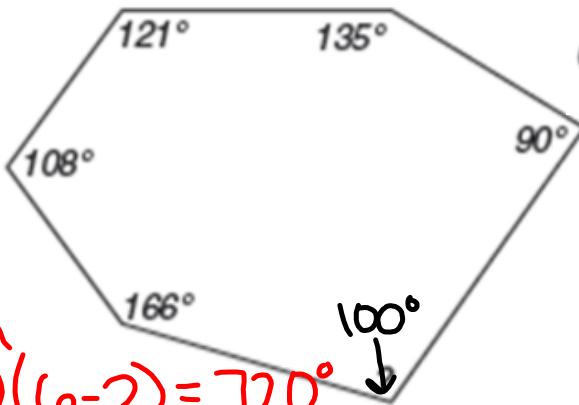
$$\frac{180(15-2)}{15} = \boxed{156^\circ}$$

4. regular 47-gon

$$\frac{180(47-2)}{47} = \boxed{172.3^\circ}$$

Determine the measure of the missing angle in each figure.

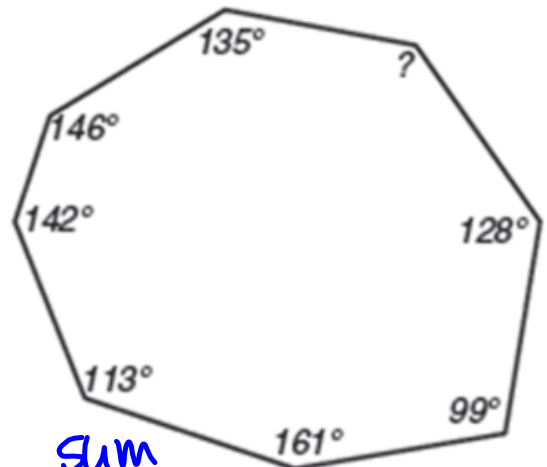
5.



sum  
 $180(6-2) = 720^\circ$

$$\rightarrow 720 - (166 + 108 + 121 + 135 + 90) = \boxed{100^\circ}$$

6.



sum  
 $180(8-2) = 1080^\circ$

$$\rightarrow 1080 - (128 + 99 + 161 + 113 + 142 + 146 + 135) = \boxed{156^\circ}$$

7. Use the figure to answer each question.

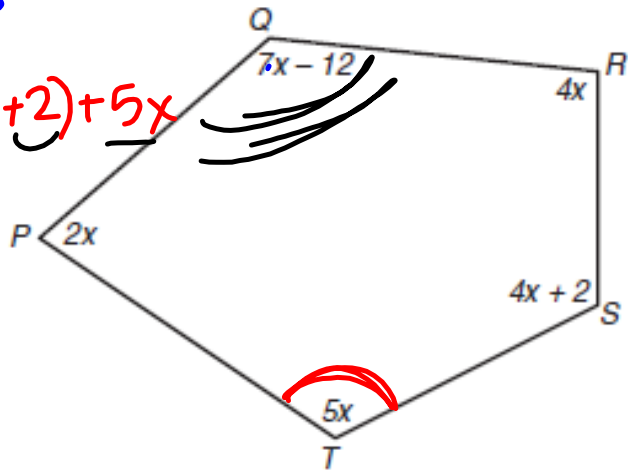
Sum:  $180(5-2) = 540^\circ$

$540 = 2x + (7x-12) + 4x + (4x+2) + 5x$

$540 = 22x - 10$   
 $+10 \quad +10$

$\frac{550}{22} = \frac{22x}{22}$

$25 = x$



a. What is the sum of the measures of the interior angles of the polygon?  $540^\circ$

b. What is the value of  $x$ ?  $x=25$

c. What is the measure of  $\angle PTS$ ?  
 $5x = 5(25) = 125^\circ$

d. What is the measure of angle  $\angle RQP$ ?

$7x-12 = 7(25)-12 = 163^\circ$

8. Suppose that the sum of the measures of the interior angles of a regular polygon is  $157.5^\circ$ . What type of polygon is it? Show your work and explain how you got your answer.

9. Suppose that the degree measure of each angle of a regular 12-gon can be represented by the expression  $2x + 5$ . Calculate the value of  $x$ .

# Exterior and Interior Angle Measurement Interactions

7.5

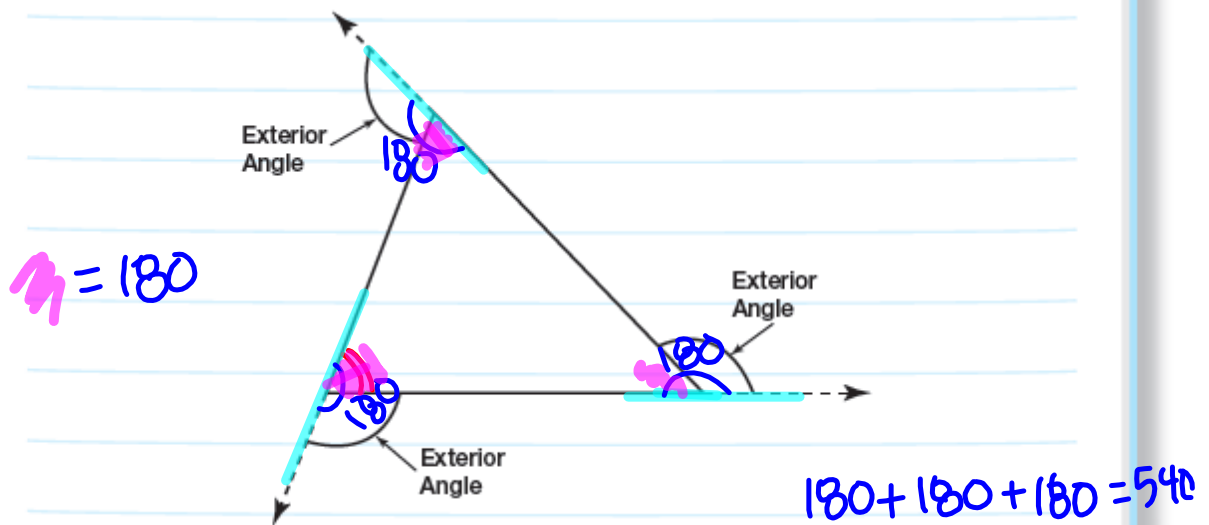
## Sum of the Exterior Angle Measures of a Polygon

PG.539-540 IN YOUR BOOK

Previously, you wrote a formula for the sum of all the interior angle measures of a polygon. In this lesson, you will write a formula for the sum of all the exterior angle measures of a polygon.

Each interior angle of a polygon can be paired with an exterior angle. **An exterior angle of a polygon is formed adjacent to each interior angle by extending one side of each vertex of the polygon as shown in the triangle.**

Each exterior angle and the adjacent interior angle form a linear pair.



1. Use the formula for the sum of interior angle measures of a polygon and the Linear Pair Postulate to calculate the sum of the exterior angle measures of a triangle.

Sum of interior angles =  $180^\circ$

$180(3-2) = 180(1)$

$540^\circ - 180^\circ = \underline{\underline{360^\circ}}$  *sum of exterior angles*

### PG.541 IN YOUR BOOK

Let's explore the sum of the exterior angle measures of other polygons.

2. Calculate the sum of the exterior angle measures of a quadrilateral by completing each step.

- a. Draw a quadrilateral and extend each side to locate an exterior angle at each vertex.

sum of interior  $\angle$ s  
 $180(4-2) = \underline{360^\circ}$

Linear pairs  
 $4(180) = 720^\circ$

sum of linear pairs - sum of interior  $\angle$ s  
 $720^\circ - 360^\circ = 360^\circ$

- b. Use the formula for the sum of interior angle measures of a polygon and the Linear Pair Postulate to calculate the sum of the exterior angle measures of a quadrilateral.

3. Calculate the sum of the exterior angle measures of a pentagon by completing each step.

- a. Draw a pentagon and extend each side to locate an exterior angle at each vertex.

Sum of Int.  
 $180(5-2) = 540^\circ$

Linear Pair Sum  
 $180(5) = 900^\circ$

$900^\circ - 540^\circ = 360^\circ$

### PG.542 IN YOUR BOOK

- b. Use the formula for the sum of the interior angle measures of a polygon and the Linear Pair Postulate to calculate the sum of the exterior angle measures of a pentagon.

## PG.542 IN YOUR BOOK

4. Calculate the sum of the exterior angle measures of a hexagon by completing each step.
  - a. Without drawing a hexagon, how many linear pairs are formed by each interior and adjacent exterior angle? How do you know?
  
  - b. What is the relationship between the number of sides of a polygon and the number of linear pairs formed by each interior angle and its adjacent exterior angle?
  
  - c. Use the formula for the sum of the interior angle measures of a polygon and the Linear Pair Postulate to calculate the sum of the measures of the exterior angles of a hexagon.

## PG.543 IN YOUR BOOK

5. Complete the table.

Number of Sides of the Polygon	3	4	5	6	7	15
Number of Linear Pairs Formed	3	4	5	6	7	15
Sum of Measures of Linear Pairs	540	720	900	1080	1260	2700
Sum of Measures of Interior Angles	180	360	540	720	900	2340
Sum of Measures of Exterior Angles	360	360	360	360	360	360

6. When you calculated the sum of the exterior angle measures in the 15-sided polygon, did you need to know anything about the number of linear pairs, the sum of the linear pair measures, or the sum of the interior angle measures of the 15-sided polygon? Explain your reasoning.
7. If a polygon has 100 sides, calculate the sum of the exterior angle measures. Explain how you calculated your answer.



8. What is the sum of the exterior angle measures of an  $n$ -sided polygon?

$$360^\circ$$

9. If the sum of the exterior angle measures of a polygon is  $360^\circ$ , how many sides does the polygon have? Explain your reasoning.

We don't know because the sum of any polygon's exterior angles is  $360^\circ$

## PG.544 IN YOUR BOOK

10. Explain why the sum of the exterior angle measures of any polygon is always equal to  $360^\circ$ .

PG.544 IN YOUR BOOK

1. Calculate the measure of each exterior angle of an equilateral triangle. Explain your reasoning.
2. Calculate the measure of each exterior angle of a square. Explain your reasoning.
3. Calculate the measure of each exterior angle of a regular pentagon. Explain your reasoning.
4. Calculate the measure of each exterior angle of a regular hexagon. Explain your reasoning.

5. Complete the table shown to look for a pattern. pg 545

Number of Sides of a Regular Polygon	3	4	5	6	7	15
Sum of Measures of Exterior Angles	360	360	360	360	360	360
Measure of Each Interior Angle	60	90	108	120	128.57	156
Measure of Each Exterior Angle	120	90	72	60	51.43	24

180-60

6. When you calculated the measure of each exterior angle in the 15-sided regular polygon, did you need to know anything about the measure of each interior angle? Explain your reasoning.
7. If a regular polygon has 100 sides, calculate the measure of each exterior angle. Explain how you calculated your answer.
8. What is the measure of each exterior angle of an  $n$ -sided regular polygon?

$n = \# \text{ of side}$   $\frac{360}{n}$

9. If the measure of each exterior angle of a regular polygon is  $18^\circ$ , how many sides does the polygon have? Explain how you calculated your answer.

$$\frac{360}{n} = 18$$

$$\frac{18n}{18} = \frac{360}{18}$$

$$n = 20$$





# Homework

## Finish Lesson 7.4